

Name : _____

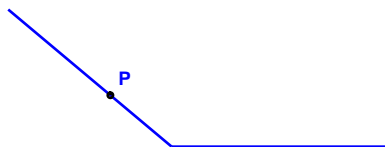
Score : _____

Teacher : _____

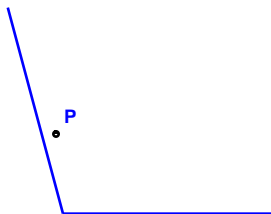
Date : _____

State if the given point is interior, exterior or on the angle.

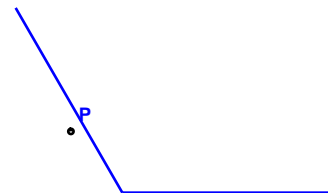
1)



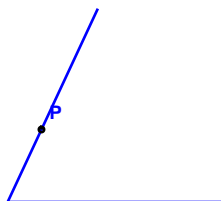
2)



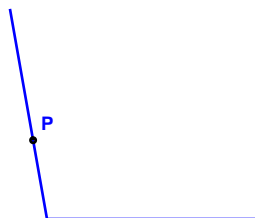
3)




4)



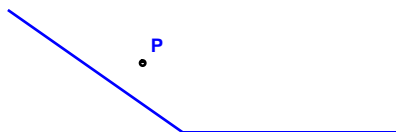
5)



6)



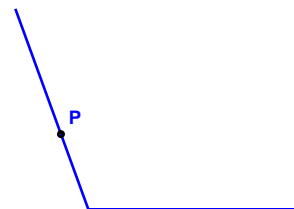
7)



8)



9)



Name : _____

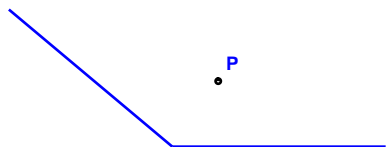
Score : _____

Teacher : _____

Date : _____

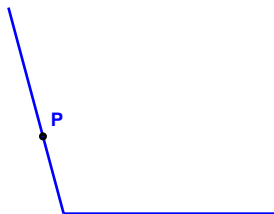
State if the given point is interior, exterior or on the angle.

1)



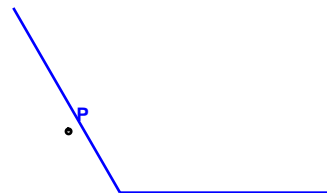
Interior to the Angle

2)



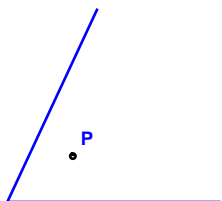
On the Angle

3)



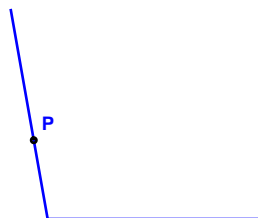
Exterior to the Angle

4)



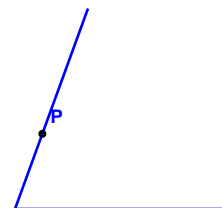
Interior to the Angle

5)



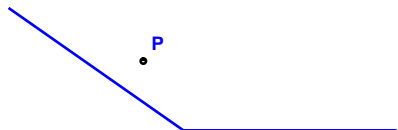
On the Angle

6)



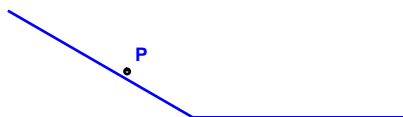
On the Angle

7)



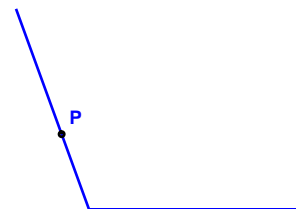
Interior to the Angle

8)



Interior to the Angle

9)



Exterior to the Angle